

# Fractions and Ordering

Order these fractions from the smallest.

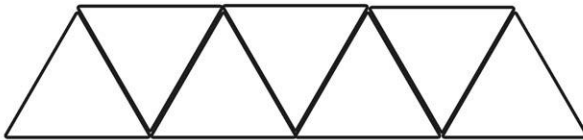
$$\frac{3}{6} \quad \frac{1}{6} \quad \frac{5}{6} \quad \frac{2}{6} \quad \frac{4}{6}$$

Order these fractions from the biggest.

$$\frac{4}{12} \quad \frac{6}{12} \quad \frac{8}{12} \quad \frac{10}{12} \quad \frac{11}{12}$$

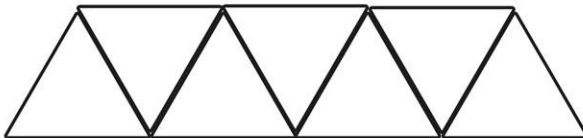
Colour the boxes according to its fraction. Which fraction is greater?

$$\frac{3}{7}$$




\_\_\_\_\_ is the greater fraction.

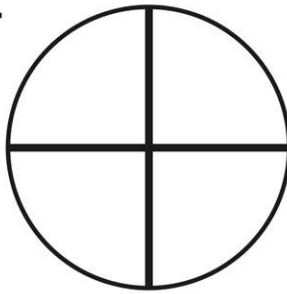
$$\frac{6}{7}$$



$$\frac{5}{8}$$



$$\frac{3}{4}$$



\_\_\_\_\_ is the greater fraction.

# Fractions and Ordering

Order these fractions from the smallest.

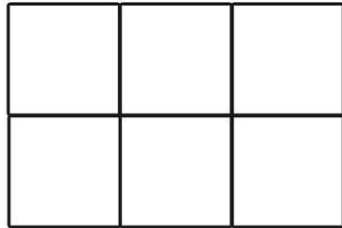
$$\frac{7}{9} \quad \frac{3}{9} \quad \frac{9}{9} \quad \frac{1}{9} \quad \frac{4}{9}$$

Order these fractions from the biggest.

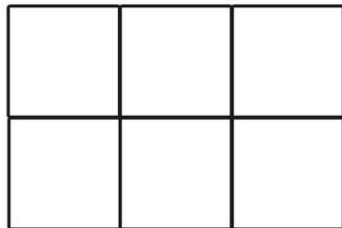
$$\frac{4}{4} \quad \frac{1}{2} \quad \frac{2}{3} \quad \frac{2}{4}$$

Colour the boxes according to its fraction. Which fraction is smallest?

$$\frac{6}{6}$$

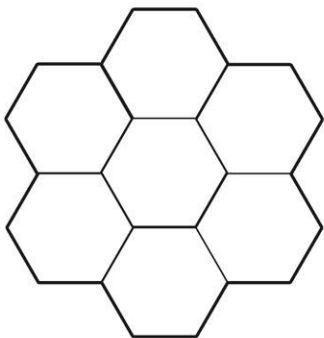


$$\frac{4}{6}$$

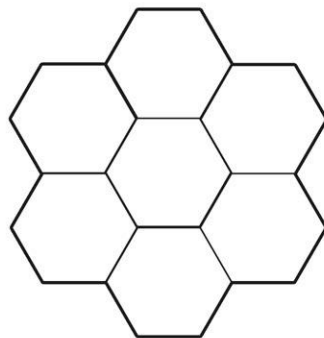


\_\_\_\_\_ is the smallest fraction.

$$\frac{2}{7}$$



$$\frac{5}{7}$$



\_\_\_\_\_ is the smallest fraction.

# Fractions and Ordering Answers

Order these fractions from the smallest.

$$\frac{3}{6} \quad \frac{1}{6} \quad \frac{5}{6} \quad \frac{2}{6} \quad \frac{4}{6}$$

$$\frac{1}{6} \quad \frac{2}{6} \quad \frac{3}{6} \quad \frac{4}{6} \quad \frac{5}{6}$$

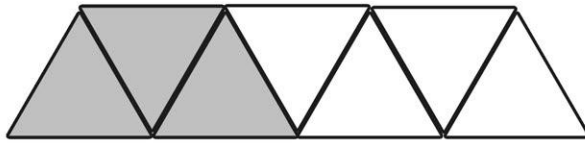
Order these fractions from the biggest.

$$\frac{4}{12} \quad \frac{6}{12} \quad \frac{8}{12} \quad \frac{10}{12} \quad \frac{11}{12}$$

$$\frac{11}{12} \quad \frac{10}{12} \quad \frac{8}{12} \quad \frac{6}{12} \quad \frac{4}{12}$$

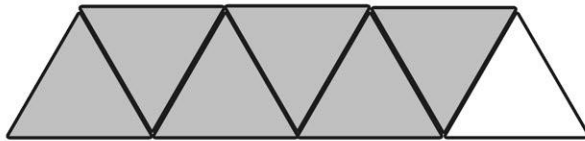
Colour the boxes according to its fraction. Which fraction is greater?

$$\frac{3}{7}$$

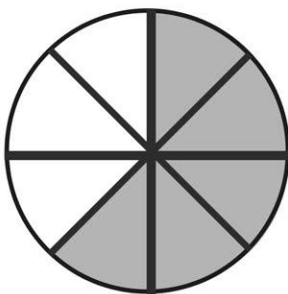


$\frac{3}{7}$  is the greater fraction.

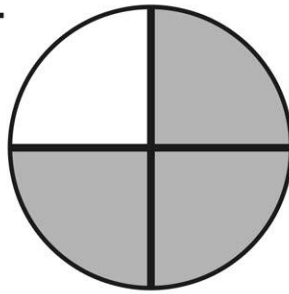
$$\frac{6}{7}$$



$$\frac{5}{8}$$



$$\frac{3}{4}$$



$\frac{3}{4}$  is the greater fraction.

# Fractions and Ordering Answers

Order these fractions from the smallest.

$$\frac{7}{9} \quad \frac{3}{9} \quad \frac{9}{9} \quad \frac{1}{9} \quad \frac{4}{9}$$

$$\frac{1}{9} \quad \frac{3}{9} \quad \frac{4}{9} \quad \frac{7}{9} \quad \frac{9}{9}$$


Order these fractions from the biggest.

$$\frac{4}{4} \quad \frac{1}{2} \quad \frac{2}{3} \quad \frac{2}{4}$$

$$\frac{4}{4} \quad \frac{2}{3} \quad \frac{2}{4} \quad \frac{1}{2}$$

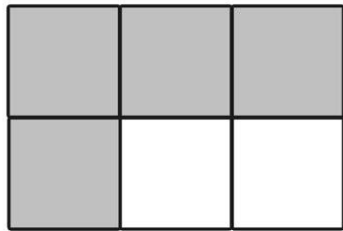
Colour the boxes according to its fraction. Which fraction is smallest?

$$\frac{6}{6}$$

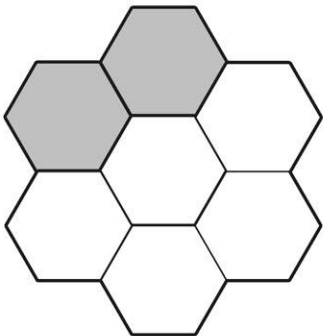


$\frac{4}{6}$  is the smallest fraction.

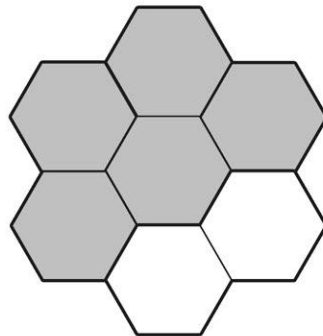
$$\frac{4}{6}$$



$$\frac{2}{7}$$



$$\frac{5}{7}$$



$\frac{2}{7}$  is the smallest fraction.